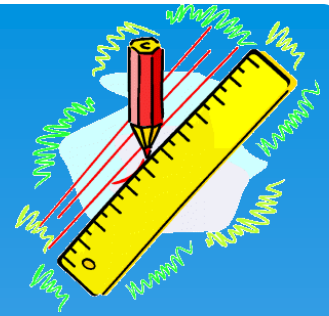
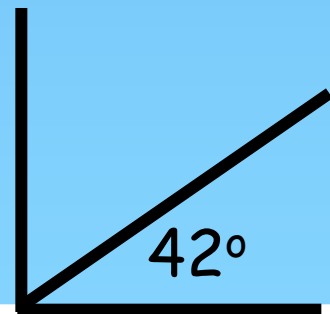
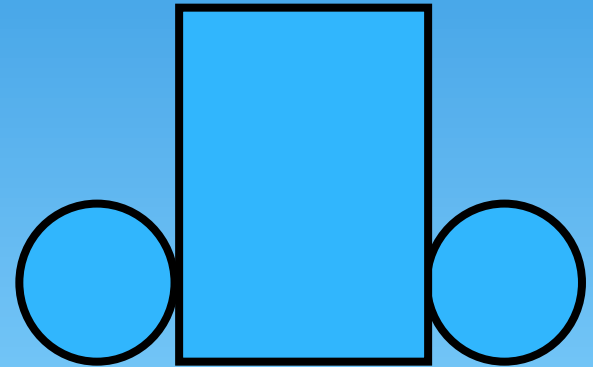


STARTER QUESTIONS



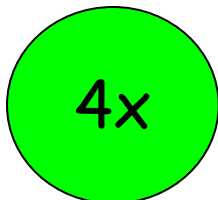
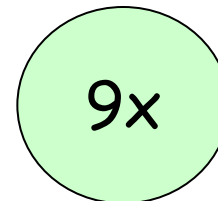
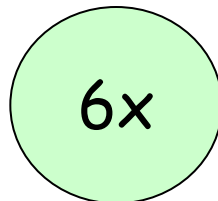
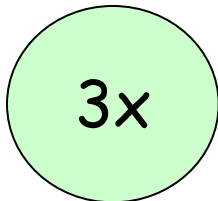





1. 67×7
2. Calculate 20% of 400
3. What is the name of the shape will this net make.
4. Calculate the value of the missing angle.



Visual Times Tables

Click on each circles to view the times tables



1	2	3	4	5	6	7	8	9	10
11	12	13	14	15	16	17	18	19	20
21	22	23	24	25	26	27	28	29	30
31	32	33	34	35	36	37	38	39	40
41	42	43	44	45	46	47	48	49	50
51	52	53	54	55	56	57	58	59	60
61	62	63	64	65	66	67	68	69	70
71	72	73	74	75	76	77	78	79	80
81	82	83	84	85	86	87	88	89	90
91	92	93	94	95	96	97	98	99	100

The 2 x
Table



1	2	3	4	5	6	7	8	9	10
11	12	13	14	15	16	17	18	19	20
21	22	23	24	25	26	27	28	29	30
31	32	33	34	35	36	37	38	39	40
41	42	43	44	45	46	47	48	49	50
51	52	53	54	55	56	57	58	59	60
61	62	63	64	65	66	67	68	69	70
71	72	73	74	75	76	77	78	79	80
81	82	83	84	85	86	87	88	89	90
91	92	93	94	95	96	97	98	99	100

The 3
x Table



Tables
Index

1	2	3	4	5	6	7	8	9	10
11	12	13	14	15	16	17	18	19	20
21	22	23	24	25	26	27	28	29	30
31	32	33	34	35	36	37	38	39	40
41	42	43	44	45	46	47	48	49	50
51	52	53	54	55	56	57	58	59	60
61	62	63	64	65	66	67	68	69	70
71	72	73	74	75	76	77	78	79	80
81	82	83	84	85	86	87	88	89	90
91	92	93	94	95	96	97	98	99	100

The 4
x Table



1	2	3	4	5	6	7	8	9	10
11	12	13	14	15	16	17	18	19	20
21	22	23	24	25	26	27	28	29	30
31	32	33	34	35	36	37	38	39	40
41	42	43	44	45	46	47	48	49	50
51	52	53	54	55	56	57	58	59	60
61	62	63	64	65	66	67	68	69	70
71	72	73	74	75	76	77	78	79	80
81	82	83	84	85	86	87	88	89	90
91	92	93	94	95	96	97	98	99	100

The 5
x Table



1	2	3	4	5	6	7	8	9	10
11	12	13	14	15	16	17	18	19	20
21	22	23	24	25	26	27	28	29	30
31	32	33	34	35	36	37	38	39	40
41	42	43	44	45	46	47	48	49	50
51	52	53	54	55	56	57	58	59	60
61	62	63	64	65	66	67	68	69	70
71	72	73	74	75	76	77	78	79	80
81	82	83	84	85	86	87	88	89	90
91	92	93	94	95	96	97	98	99	100

The 6
x Table



1	2	3	4	5	6	7	8	9	10
11	12	13	14	15	16	17	18	19	20
21	22	23	24	25	26	27	28	29	30
31	32	33	34	35	36	37	38	39	40
41	42	43	44	45	46	47	48	49	50
51	52	53	54	55	56	57	58	59	60
61	62	63	64	65	66	67	68	69	70
71	72	73	74	75	76	77	78	79	80
81	82	83	84	85	86	87	88	89	90
91	92	93	94	95	96	97	98	99	100

The 7
x Table



1	2	3	4	5	6	7	8	9	10
11	12	13	14	15	16	17	18	19	20
21	22	23	24	25	26	27	28	29	30
31	32	33	34	35	36	37	38	39	40
41	42	43	44	45	46	47	48	49	50
51	52	53	54	55	56	57	58	59	60
61	62	63	64	65	66	67	68	69	70
71	72	73	74	75	76	77	78	79	80
81	82	83	84	85	86	87	88	89	90
91	92	93	94	95	96	97	98	99	100

Tables
Index

The 8 x
Table



1	2	3	4	5	6	7	8	9	10
11	12	13	14	15	16	17	18	19	20
21	22	23	24	25	26	27	28	29	30
31	32	33	34	35	36	37	38	39	40
41	42	43	44	45	46	47	48	49	50
51	52	53	54	55	56	57	58	59	60
61	62	63	64	65	66	67	68	69	70
71	72	73	74	75	76	77	78	79	80
81	82	83	84	85	86	87	88	89	90
91	92	93	94	95	96	97	98	99	100

The 9 x
Table



1	2	3	4	5	6	7	8	9	10
11	12	13	14	15	16	17	18	19	20
21	22	23	24	25	26	27	28	29	30
31	32	33	34	35	36	37	38	39	40
41	42	43	44	45	46	47	48	49	50
51	52	53	54	55	56	57	58	59	60
61	62	63	64	65	66	67	68	69	70
71	72	73	74	75	76	77	78	79	80
81	82	83	84	85	86	87	88	89	90
91	92	93	94	95	96	97	98	99	100

The 10
x Table



Times Tables

x	1	2	3	4	5	6	7	8	9	10
1	1	2	3	4	5	6	7	8	9	10
2	2	4	6	8	10	12	14	16	18	20
3	3	6	9	12	15	18	21	24	27	30
4	4	8	12	16	20	24	28	32	36	40
5	5	10	15	20	25	30	35	40	45	50
6	6	12	18	24	30	36	42	48	54	60
7	7	14	21	28	35	42	49	56	63	70
8	8	16	24	32	40	48	56	64	72	80
9	9	18	27	36	45	54	63	72	81	90
10	10	20	30	40	50	60	70	80	90	100

Decimal Times Tables (1)

x	0.1	0.2	0.3	0.4	0.5	0.6	0.7	0.8	0.9	1.0
1	0.1	0.2	0.3	0.4	0.5	0.6	0.7	0.8	0.9	1.0
2	0.2	0.4	0.6	0.8	1.0	1.2	1.4	1.6	1.8	2.0
3	0.3	0.6	0.9	1.2	1.5	1.8	2.1	2.4	2.7	3.0
4	0.4	0.8	1.2	1.6	2.0	2.4	2.8	3.2	3.6	4.0
5	0.5	1.0	1.5	2.0	2.5	3.0	3.5	4.0	4.5	5.0
6	0.6	1.2	1.8	2.4	3.0	3.6	4.2	4.8	5.4	6.0
7	0.7	1.4	2.1	2.8	3.5	4.2	4.9	5.6	6.3	7.0
8	0.8	1.6	2.4	3.2	4.0	4.8	5.6	6.4	7.2	8.0
9	0.9	1.8	2.7	3.6	4.5	5.4	6.3	7.2	8.1	9.0
10	1.0	2.0	3.0	4.0	5.0	6.0	7.0	8.0	9.0	10.0

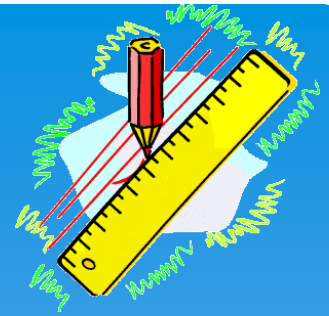
Decimal Times Tables (2)

x	0.1	0.2	0.3	0.4	0.5	0.6	0.7	0.8	0.9	1.0
0.1	0.01	0.02	0.03	0.04	0.05	0.06	0.07	0.08	0.09	0.1
0.2	0.02	0.04	0.06	0.08	0.1	0.12	0.14	0.16	0.18	0.2
0.3	0.03	0.06	0.09	0.12	0.15	0.18	0.21	0.24	0.27	0.3
0.4	0.04	0.08	0.12	0.16	0.2	0.24	0.28	0.32	0.36	0.4
0.5	0.05	0.1	0.15	0.2	0.25	0.3	0.35	0.4	0.45	0.5
0.6	0.06	0.12	0.18	0.24	0.3	0.36	0.42	0.48	0.54	0.6
0.7	0.07	0.14	0.21	0.28	0.35	0.42	0.49	0.56	0.63	0.7
0.8	0.08	0.16	0.24	0.32	0.4	0.48	0.56	0.64	0.72	0.8
0.9	0.09	0.18	0.27	0.36	0.45	0.54	0.63	0.72	0.81	0.9
1.0	0.1	0.2	0.3	0.4	0.5	0.6	0.7	0.8	0.9	1.0

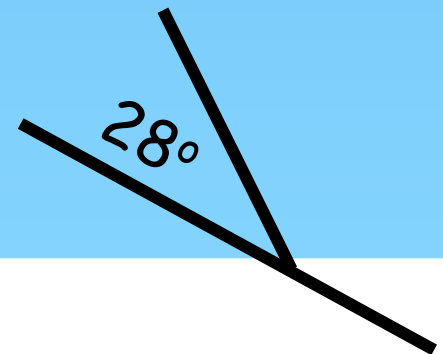
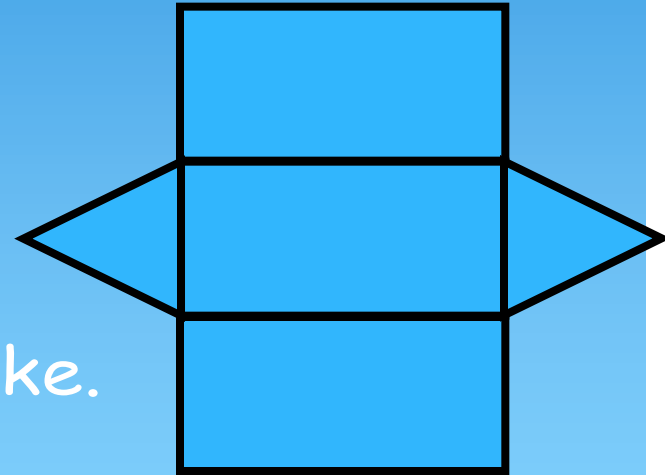
Decimal Times Tables (2)

x	0.1	0.2	0.3	0.4	0.5	0.6	0.7	0.8	0.9	1.0
0.1										
0.2										
0.3										
0.4										
0.5										
0.6										
0.7										
0.8										
0.9										
1.0										

STARTER QUESTIONS




1. 39×2
2. Calculate 50% of 750
3. What is the name of the shape will this net make.
4. Calculate the value of the missing angle.




Square Numbers



Click on the questions to reveal the answers





= 1



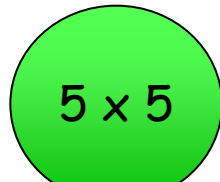

= 4




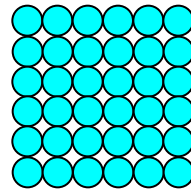
= 9



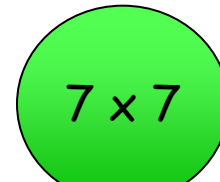

= 16




= 25



= 49




= 49




$$8 \times 8$$

$$= 64$$




$$9 \times 9$$

$$= 81$$




$$10 \times 10$$

$$= 100$$



$$11 \times 11$$

$$= 121$$



$$12 \times 12$$

$$= 144$$

Square Roots

Click on each number to reveal the square root

25

5

$(5 \times 5 = 25)$

64

8

$(8 \times 8 = 64)$

49

7

$(7 \times 7 = 49)$

144

12

$(12 \times 12 = 144)$

81

9

$(9 \times 9 = 81)$

4

2

$(2 \times 2 = 4)$

169

13

$(13 \times 13 = 169)$

9

3

$(3 \times 3 = 9)$

16

4

$(4 \times 4 = 16)$

36

6

$(6 \times 6 = 36)$

100

10

$(10 \times 10 = 100)$

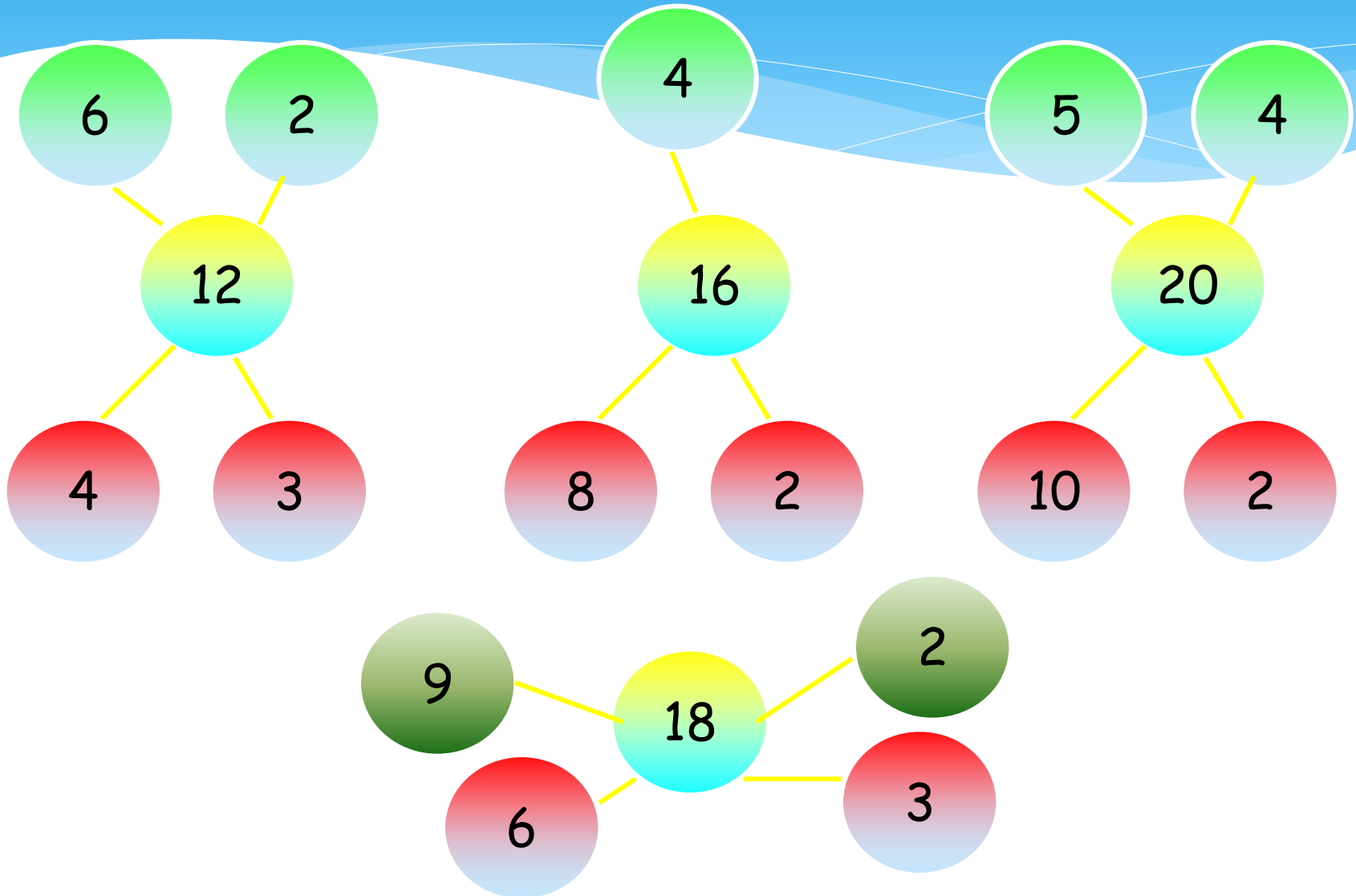
121

11

$(11 \times 11 = 121)$

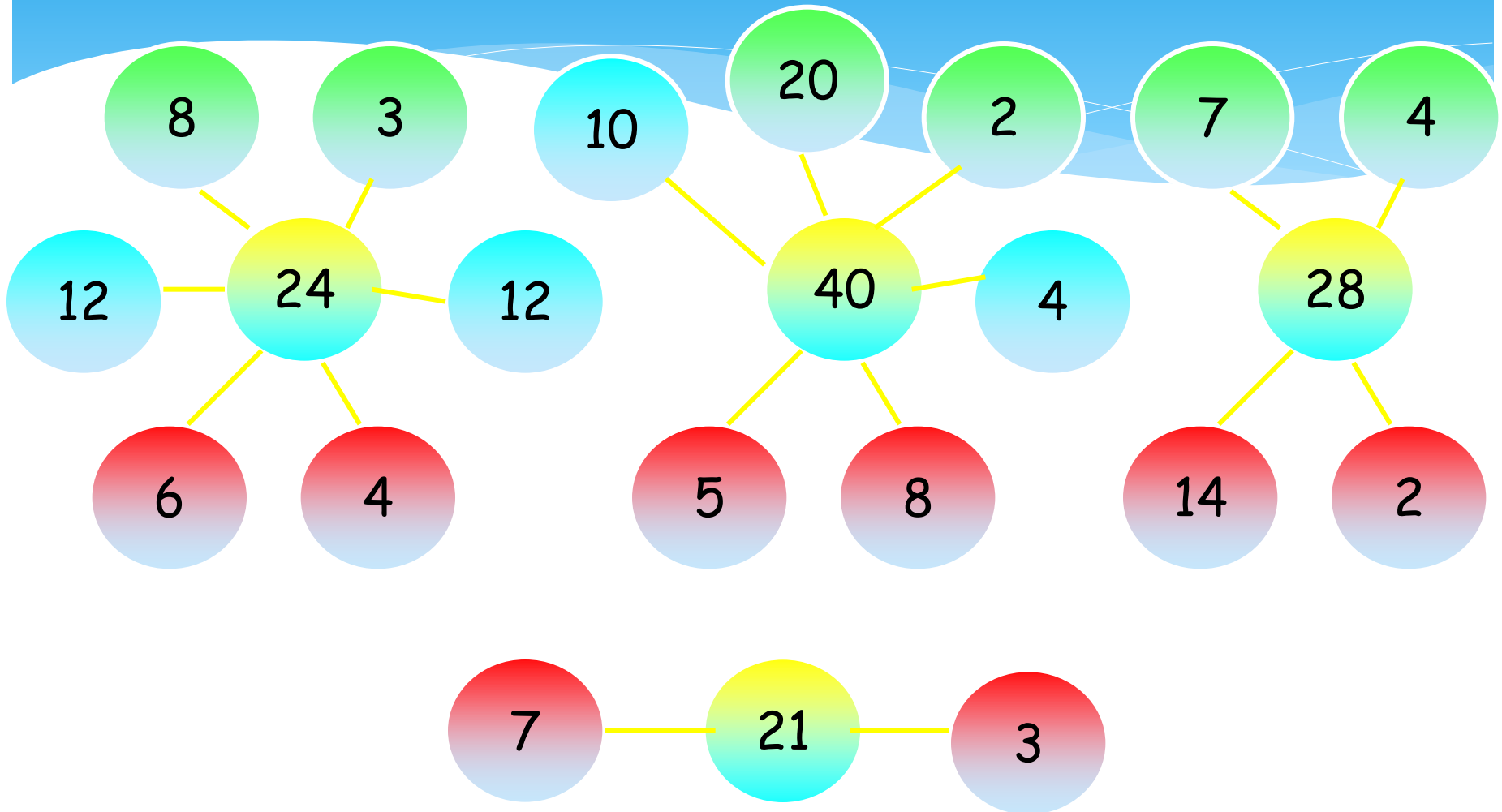
Finding Factors of Numbers

Keep clicking on the number to reveal each factor.

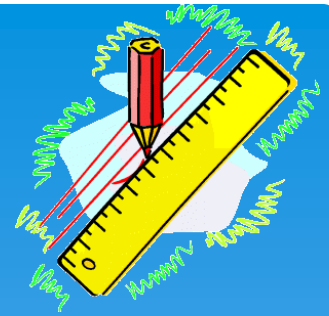


Finding Factors of Numbers

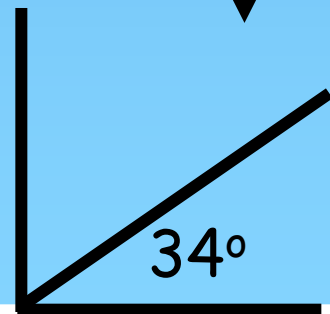

Keep clicking on the number to reveal each factor.



STARTER QUESTIONS

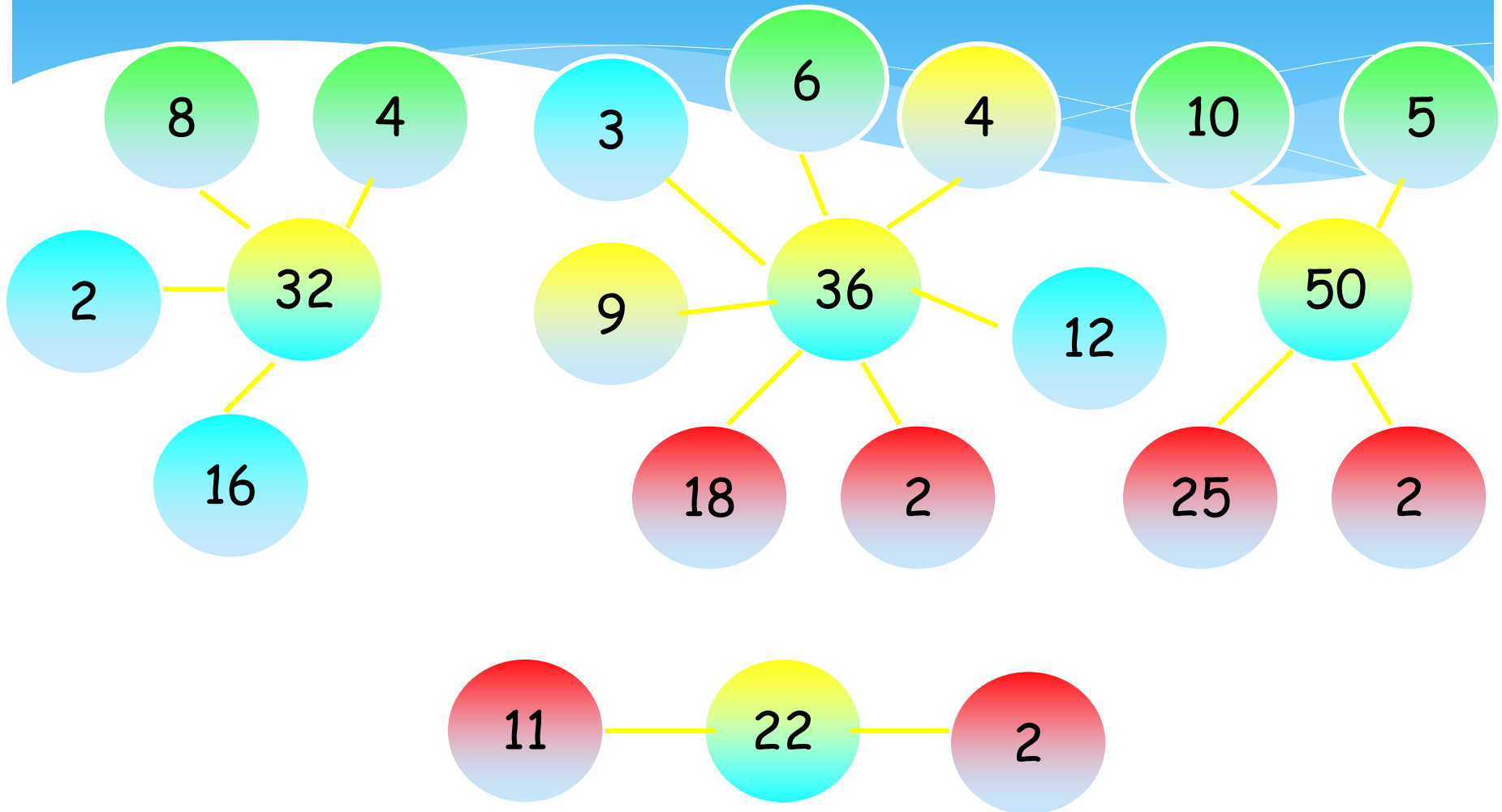


1. $39.7 - 22.3$
2. Calculate 25% of 824
3. What is the name of the shape will this net make.
4. Calculate the value of the missing angle.



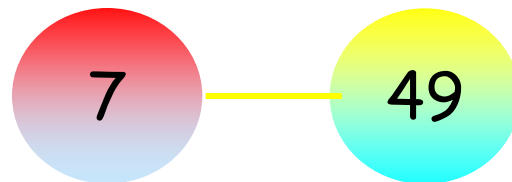
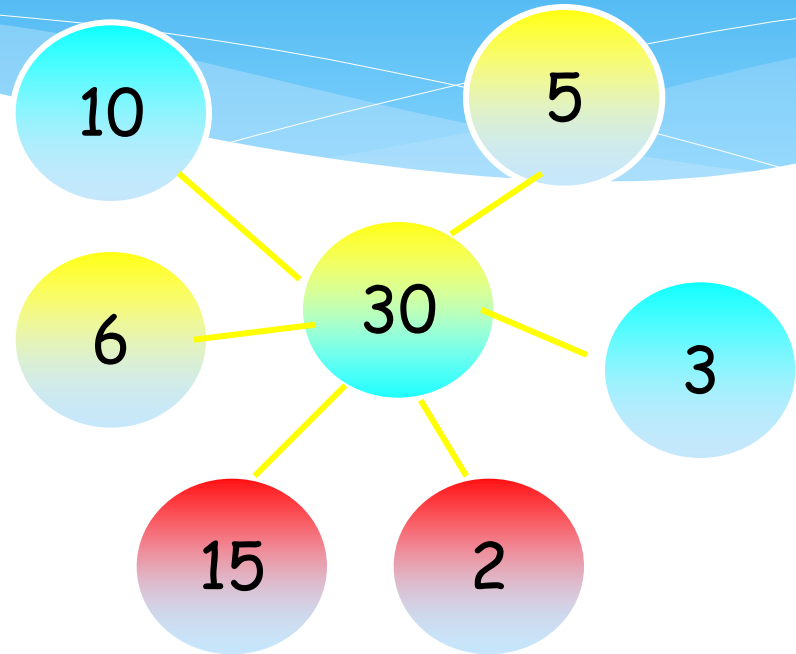
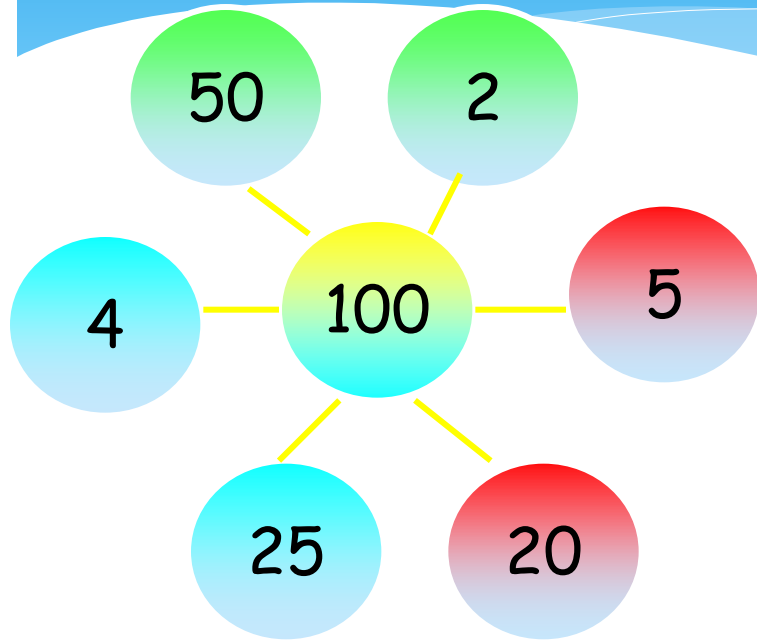
Finding Factors of Numbers

Keep clicking on the number to reveal each factor.

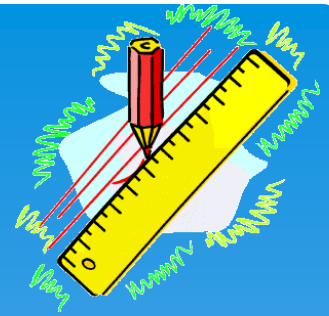


Finding Factors of Numbers

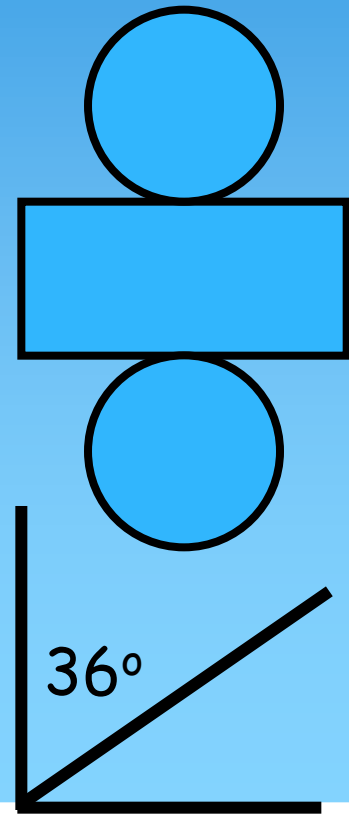
Keep clicking on the number to reveal each factor.



STARTER QUESTIONS



1. $76 - 54$
2. Calculate 75% of 400
3. What is the name of the shape will this net make.
4. Calculate the value of the missing angle.



Are These Prime Numbers?

Click on each number to reveal the answer

19

Yes

34

No

Even numbers can't be a prime number!

49

No

$(7 \times 7 = 49)$

21

No

$(7 \times 3 = 21)$

23

Yes

27

No

$(9 \times 3 = 27)$

31

Yes

51

No

$(17 \times 3 = 51)$

57

No

$(19 \times 3 = 57)$

17

Yes

2

Yes

2 is the only prime number that is even

53

Yes

1	2	3	4	5	6	7	8	9	10
11	12	13	14	15	16	17	18	19	20
21	22	23	24	25	26	27	28	29	30
31	32	33	34	35	36	37	38	39	40
41	42	43	44	45	46	47	48	49	50
51	52	53	54	55	56	57	58	59	60
61	62	63	64	65	66	67	68	69	30
71	72	73	74	75	76	77	78	79	40
81	82	83	84	85	86	87	88	89	90
91	92	93	94	95	96	97	98	99	

Prime
Numbers



Reveal Next
Prime Number